

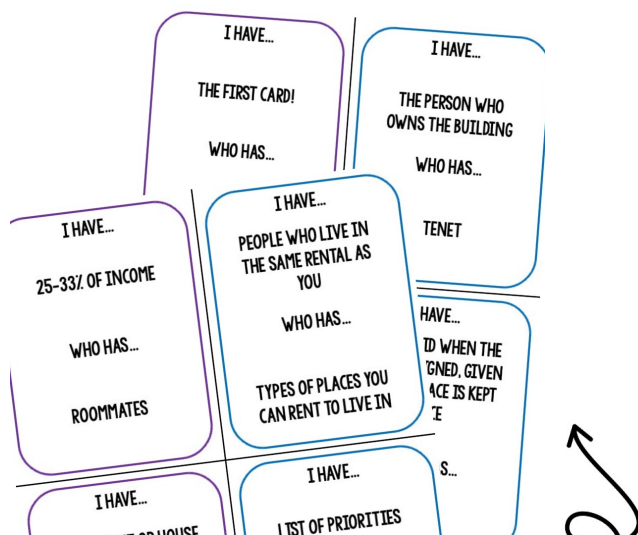
CHECK OUT THIS BLOG: RENTING: UNDERSTANDING A LEASE, MANAGING BILLS, AND MORE



CLICK HERE ^ TO KEEP READING!

- ✓ TRANSFER THE SKILL OF SMALL BUDGET PURCHASES TO LARGER, REAL LIFE RENT AND BILL BUDGETS,

AND THIS FREE RESOURCE:




CLICK HERE TO SUBSCRIBE FOR ACCESS TO THE FREEBIE!

- ✓ FUN 'I HAVE... WHO HAS' REVIEW CARD GAME ALL ABOUT RENTING
- ✓ SUBSCRIBE TO GAIN THE PASSCODE TO OPEN A WHOLE FREE RESOURCE LIBRARY!


YOU MAY ALSO LIKE...

Get 36 more pages in this resource!



6 KEY SKILLS | 40 VERSIONS

CONSUMER MATH PRACTICE



4 CONSUMER MATH PRACTICE

Do you have enough money?
Total: \$12.33 Yes No


Circle the item that is the best value.

\$0.75 \$4.55

Is this purchase in budget?
Budget: \$50.00 Purchase: \$47.80

CONSUMER MATH | NO PREP | ANSWER KEY

FUNCTIONAL MATH PRACTICE



LIFE SKILLS

PRINT & GO

MONEY SKILLS

TELLING TIME

7 FUNCTIONAL MATH REVIEW

Using the Dollar Up method, what would you pay the cashier?
\$4.58

Count by 10
0, _____, 20, _____

What time does the clock read?


Do you have enough money to make the purchase?
Money: _____
Total: \$6.05

How much money is this?
You need _____ is the total

36 versions

CONSUMER MATH BUNDLE CURRICULUM + WORKBOOK

FULL YEAR CURRICULUM + PRACTICE



DEBIT CARD: WHATS STEP 1: VOCABULARY

TERM	DEFINITION	SYMBOL
Debit		
PIN		
Security Code		
Chip		
Swipe		
Debit Card		

4 CONSUMER MATH PRACTICE

Do you have enough money?
Total: \$12.33 Yes No

Circle the item that is the best value.

\$0.75 \$4.55

Is this purchase in budget?
Budget: \$50.00 Purchase: \$47.80

Write a check: CallPhone Galaxy Services for \$38.71

1,200+ PAGES

FULL YEAR CURRICULUM + WEEKLY WORKBOOK PRACTICE

GRAPHICS & FONT CREDIT



Consumer Math- Weekly Practice

These worksheets are intended to keep your student's consumer math skills strong through frequent exposure.

Top Left Box: Question assesses the student's ability to identify if they have enough cash for a purchase

2nd Top Left Box: Question assesses the student's ability to determine if a purchase is in budget (value given numerically)

Top Right Box: Question assesses the student's ability to compare prices of similar items

Middle Box: Question assesses the student's ability to write a check

Bottom Left Box: Question assesses the student's ability to balance a checking account after writing a check (use the value from the Middle Box-Check Writing step)

Bottom Right Box: Question assesses the student's ability to calculate income and find a percent (i.e., to save in a savings account). Pages 1-20 calculate 10% and pages 21-40 calculate 15%.

CONSUMER MATH PRACTICE

NAME: _____

Do you have enough money?



Total: \$11.45 Yes No



Circle the item that is the best value.

\$3.59

\$4.09



Is this purchase in budget?

Budget: \$10.00 Purchase: \$9.05

Yes No

Write a check: City Rent Company for \$700.00

106

DATE _____

PAY TO _____

\$

DOLLARS

FOR _____

09876543

123456789

Balance the Checking Acct:

Balance: \$950.00

Check Amount: _____

New Balance: _____

Calculate the earned income.

Hours worked: 12 Hourly wage: \$11.50

Income: _____

What is 10% of the income? _____

1 CONSUMER MATH PRACTICE- ANSWER KEY

Do you have enough money?

Total: \$11.45

Yes



No



Circle the item that is the best value.

\$3.59

\$4.09



Is this purchase in budget?

Budget: \$10.00

Purchase: \$9.05

Yes

No

Write a check: City Rent Company for \$700.00

106

DATE _____

PAY TO City Rent Company

\$

700.00

Seven hundred and 00/100-----

DOLLARS

FOR Rent

09876543

123456789

Balance the Checking Acct:

Balance: \$950.00

Check Amount: \$700.00

New Balance: \$250.00

Calculate the earned income.

Hours worked: 12 Hourly wage: \$11.50

Income: \$138.00

What is 10% of the income? \$13.80

CONSUMER MATH PRACTICE

NAME: _____

Do you have enough money?

Total: \$17.53 Yes No



Circle the item that is the best value.

\$2.90



\$3.50



Is this purchase in budget?

Budget: \$50.00 Purchase: \$23.90

Yes No

Write a check: City Water Company for \$24.98

106

DATE _____

PAY TO _____

\$

DOLLARS

FOR _____

09876543

123456789

Balance the Checking Acct:

Balance: \$140.00

Check Amount: _____

New Balance: _____

Calculate the earned income.

Hours worked: 29 Hourly wage: \$12.55

Income: _____

What is 10% of the income? _____

CONSUMER MATH PRACTICE-ANSWER KEY

Do you have enough money?

Total: \$17.53 Yes No




Circle the item that is the best value.

\$2.90



\$3.50



Is this purchase in budget?

Budget: \$50.00 Purchase: \$23.90

Yes

No

Write a check: City Water Company for \$24.98

106

DATE _____

PAY TO City Water Company

\$ 24.98

Twenty four and 98/100----- DOLLARS

FOR Water bill

09876543

123456789

Balance the Checking Acct:

Balance: \$140.00

Check Amount: \$24.98

New Balance: \$115.02

Calculate the earned income.

Hours worked: 29 Hourly wage: \$12.55

Income: \$301.30

What is 10% of the income? \$30.13

CONSUMER MATH PRACTICE

NAME: _____

Do you have enough money?

Total: \$7.14

Yes

No



Circle the item that is the best value.

\$2.10



\$5.80



Is this purchase in budget?

Budget: \$10.00 Purchase: \$7.80

Yes

No

Write a check: City Heat Company for \$136.70

106

DATE _____

PAY TO _____

\$

DOLLARS

FOR _____

09876543

123456789

Balance the Checking Acct:

Balance: \$456.90

Check Amount: _____

New Balance: _____

Calculate the earned income.

Hours worked: 30 Hourly wage: \$15.90

Income: _____

What is 10% of the income? _____

CONSUMER MATH PRACTICE-ANSWER KEY

Do you have enough money?

Total: \$7.14 Yes No



Circle the item that is the best value.

\$2.10



\$5.80



Is this purchase in budget?

Budget: \$10.00 Purchase: \$7.80

Yes

No

Write a check: City Heat Company for \$136.70

106

DATE _____

PAY TO City Heat Company \$ 136.70

One hundred thirty six and 70/100 _____ DOLLARS

FOR Heat bill _____

09876543 123456789

Balance the Checking Acct:

Balance: \$456.90

Check Amount: **\$136.70**

New Balance: **\$320.20**

Calculate the earned income.

Hours worked: 30 Hourly wage: \$15.90

Income: **\$477.00**

What is 10% of the income? **\$47.70**

CONSUMER MATH PRACTICE

NAME: _____

Do you have enough money?

Total: \$12.33 Yes No




Circle the item that is the best value.

\$0.75



\$4.55



Is this purchase in budget?

Budget: \$50.00 Purchase: \$47.80

Yes No

Write a check: CellPhone Galaxy Service for \$88.71

106

DATE _____

PAY TO _____

\$

DOLLARS

FOR _____

09876543

123456789

Balance the Checking Acct:

Balance: \$ 220.95

Check Amount: _____

New Balance: _____

Calculate the earned income.

Hours worked: 33 Hourly wage: \$17.30

Income: _____

What is 10% of the income? _____

CONSUMER MATH PRACTICE-ANSWER KEY

Do you have enough money?

Total: \$12.33 **Yes** No



Circle the item that is the best value.

\$0.75



\$4.55



Is this purchase in budget?

Budget: \$50.00 Purchase: \$47.80

Yes No

Write a check: CellPhone Galaxy Service for \$88.71

	106
DATE _____	
PAY TO <u>CellPhone Galaxy Service</u>	\$ 88.71
<u>Eighty eight and 71/100-----</u>	DOLLARS
FOR <u>Cell phone bill</u>	
09876543 123456789	

Balance the Checking Acct:

Balance: \$ 220.95

Check Amount: **\$88.71**

New Balance: **\$132.24**

Calculate the earned income.

Hours worked: 33 Hourly wage: \$17.30

Income: **\$570.90**

What is 10% of the income? **\$57.09**

CHECK OUT THESE RESOURCES:

CAN I AFFORD THIS? WORKSHEETS & BOOM CARDS

CAN I AFFORD THIS? BUNDLE

FUNCTIONAL
LIFE SKILLS MATH

MONTHLY BILLS VS
INCOME

HOURS WORKED VS
COST



Can I Afford This? Monthly Bill Practice

NAME: _____ DATE: _____

Can I Afford This? Hours of Work

NAME: _____ DATE: _____

Activity: Ticket to a school dance Cost: \$25.00

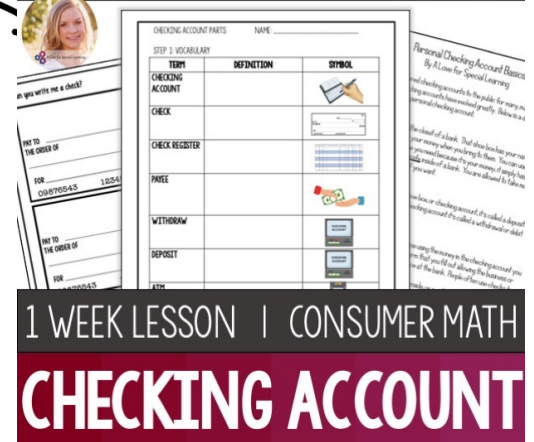
Hourly Wage: \$12.35

HOURS	GROSS PAY	NET PAY
Hours		Gross pay

Worksheets & Boom Cards

FULL CHECKING ACCOUNT LESSON UNIT

46 PAGES | LOW PREP | PRINT WITH
BOOM CARDS



Checking Account Parts

NAME: _____

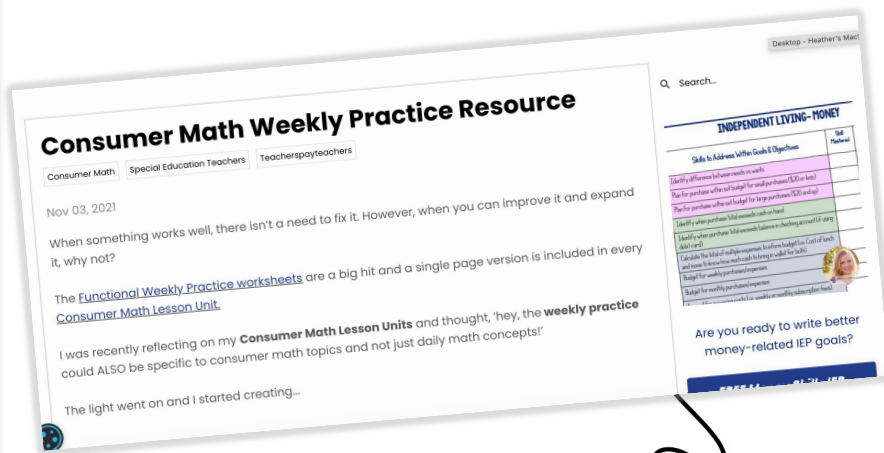
STEP 1: VOCABULARY

TERM	DEFINITION	SYMBOL
CHECKING ACCOUNT		
CHECK		
CHECK REGISTER		
WRITE		
WITHDRAW		
DEPOSIT		

1 WEEK LESSON | CONSUMER MATH
CHECKING ACCOUNT

CLICK THE IMAGES TO GRAB THE RESOURCES!

AND THIS BLOG: CONSUMER MATH WEEKLY PRACTICE RESOURCE



- ✓ CONSUMER MATH SKILL PRACTICE WORKSHEET TO KEEP THOSE FUNCTIONAL MATH SKILLS STRONG ALL THROUGHOUT THE YEAR!

CLICK HERE ^ TO KEEP READING!

ABOUT ME




I've been teaching for over 10 years and continue to find joy in working with students with disabilities!

I currently teach transition age young adults (18-22 years old) with moderate to severe disabilities. Community experiences, life skills, consumer math, and vocational skills are the focus and I love that each day is different and new.

My educational background includes- Bachelor's Degree in Elementary Education and Special Education, Master's Degree in Advanced Special Education, and 30+ Graduate Hours in Assistive Technology.

-Heather

CONNECT WITH ME HERE!



JOIN MY NEWSLETTER HERE

YOU WILL GET ACCESS TO EXCLUSIVE MATERIALS AND NOTIFICATIONS OF UPCOMING SALES AND NEW RESOURCES!



A Love for Special Learning

TERMS OF USE

Thank you for downloading this file. I hope you enjoy using the resource in your classroom.

Please consider finding other lessons and activities here-

On my TPT store at: <http://bit.ly/ALoveforSpecialLearning>

On my website: www.aloveforspeciallearning.com

On Instagram: [@ALoveForSpecialLearning](https://www.instagram.com/ALoveForSpecialLearning)

On Facebook: [facebook.com/ALoveforSpecialLearning/](https://www.facebook.com/ALoveforSpecialLearning/)

Terms of Use

This file comes with a limited use license for the original download ONLY, single classroom use. Out of respect, please do not freely share this document with others. If you required additional versions, additional licenses can be accessed by [subscribing to my newsletter](#) or by visiting my [TeachersPayTeachers store](#).

© Copyright A Love of Special Learning. All rights reserved.

Permission is granted to copy pages specifically for student or teacher use only by the original purchaser or licensee. The reproduction of this product for any other use is strictly prohibited. Copying of any part of the product and placing it on the Internet (even a personal classroom website) is strictly prohibited. Doing so makes it possible for an Internet search to make the document available on the Internet, free of charge, and is a violation of the Digital Millennium Copyright Act (DMCA).

